






Musical Notes and Rests


This  is a quarter note. It receives 1 beat of sound.


This  is a quarter rest. It receives 1 beat of silence.

This  is an eighth note. It receives $\frac{1}{2}$ beat of sound.

This  is an eighth rest. It receives $\frac{1}{2}$ beat of silence.


This  is a sixteenth note. It receives $\frac{1}{4}$ beat of sound.

This  is a sixteenth rest. It receives $\frac{1}{4}$ beat of silence.


This  is a half note. It receives 2 beats of sound.

This  is a half rest. It receives 2 beats of silence.

This  is a whole note. It receives 4 beats of sound.

This  is a whole rest. It receives 4 beats of silence.

When two eighth notes  are grouped together, a

bar-line  is needed to combine them.

When four sixteenth notes  are grouped together,









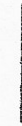

a double bar-line  is needed to combine them.

Name: _____

Grade: _____

Identify all 14 major musical notes, rests, and clefs with a correct name. Place a number from the box of musical words on the blank line to identify each musical symbol.


- | | | | | |
|------------------|-----------------|-------------------------|----------------------------|---------------------|
| 1.) QUARTER NOTE | 2.) EIGHTH NOTE | 3.) HALF NOTE | 4.) WHOLE NOTE | 5.) SIXTEENTH NOTE |
| 6.) QUARTER REST | 7.) EIGHTH REST | 8.) HALF REST | 9.) WHOLE REST | 10.) SIXTEENTH REST |
| 11.) TREBLE CLEF | 12.) BASS CLEF | 13.) BARRED EIGHTH NOTE | 14.) BARRED SIXTEENTH NOTE | |





Name: _____

Grade: _____


Please fill in the sentences with missing words and numbers. Spell the names of the musical note or rest on the first blank line. Then identify the beat values of each note or rest on the second blank line.

This  _____ receives _____ beats of sound.


This  _____ receives _____ beats of silence.


This  _____ receives _____ beats of sound.

This  _____ receives _____ beats of silence.

This  _____ receives _____ beats of sound.


This  _____ receives _____ beats of silence.


This  _____ receives _____ beats of sound.

This  _____ receives _____ beats of silence.

This  _____ receives _____ beats of sound.

This  _____ receives _____ beats of silence.

When two eighth notes  are grouped together, what is needed to combine them?

When four sixteenth notes  are grouped together, what is needed to combine them?

| Name: | Notes | Rests | Beats |
|------------------|--------------|--------------|--------------|
| Quarter | | | |
| Eighth | | | |
| Sixteenth | | | |
| Half | | | |
| Whole | | | |